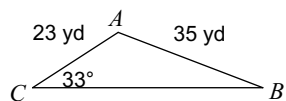


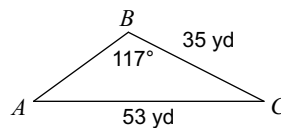
Worksheet 26 - Lesson 72

Find each measurement indicated. Round your answers to the nearest tenth.

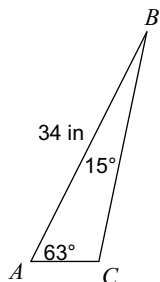
1) Find $m\angle B$



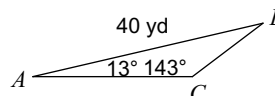
2) Find $m\angle A$



3) Find AC

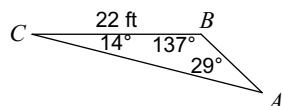


4) Find BC

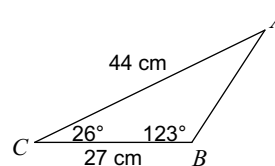


Solve each triangle. Round your answers to the nearest tenth.

5)

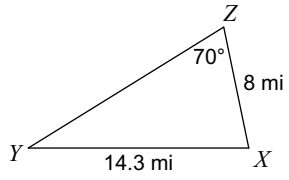


6)

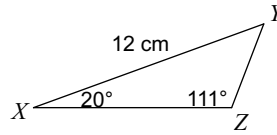


Find the area of each triangle to the nearest tenth.

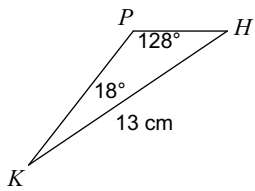
7)



8)



9)



10)

