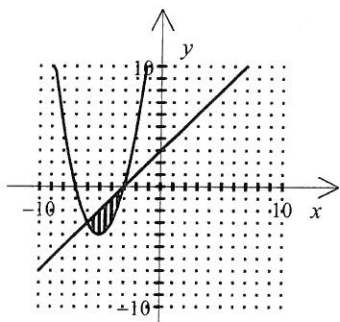


Comprehensive Review #6

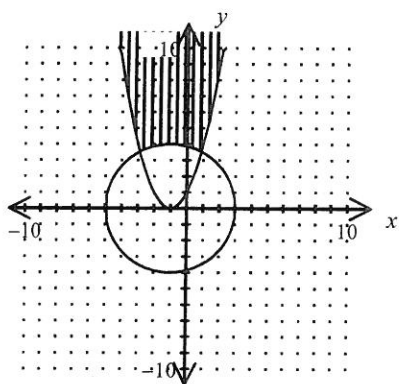
Topics:

Lesson 56 - System of inequalities

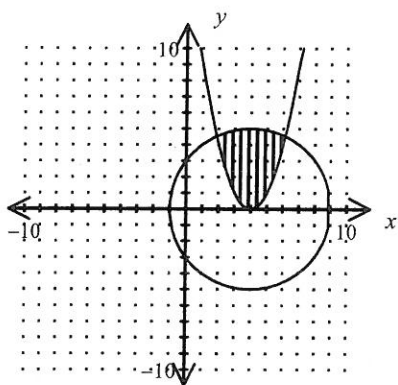
Lesson 63 - Circles and completing the square



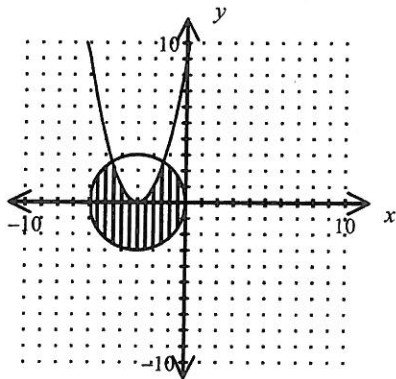
[1]



[2]



[3]

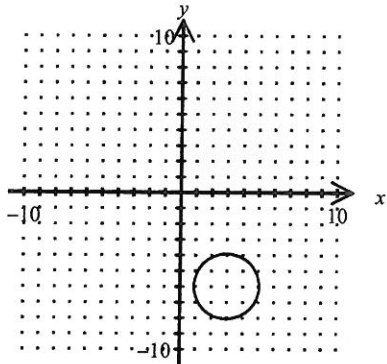


[4] _____

[5] [B]

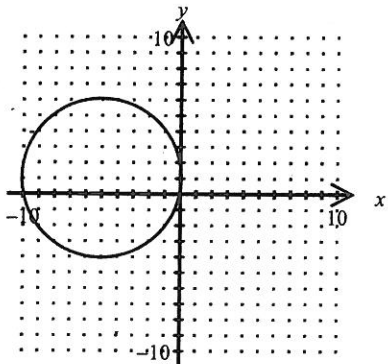
[6] [A]

center $(3, -6)$; $r = 2$



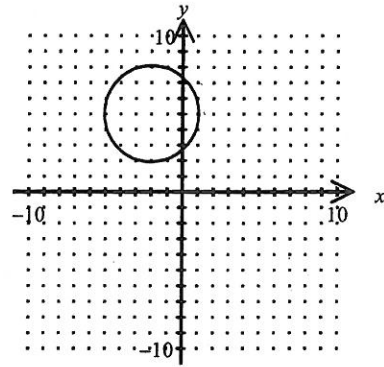
[7] _____

center $(-5, 1)$; $r = 5$



[8] _____

center $(-2, 5)$; $r = 3$



[9] _____

[10] [D]

[11] [B]

[12] [D]